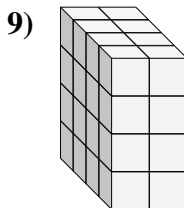
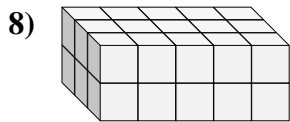
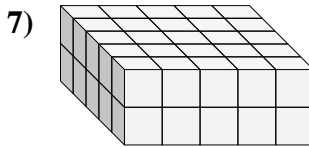
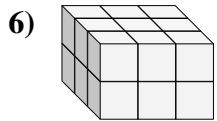
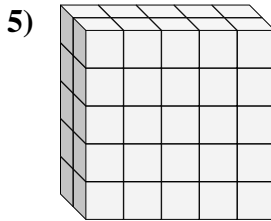
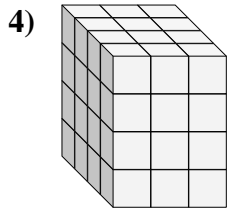
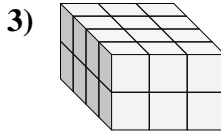
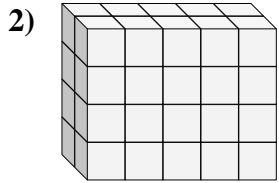
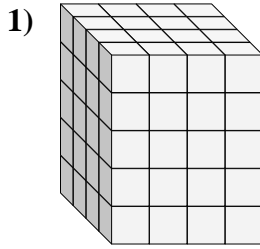
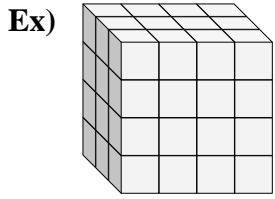




Find the length, width and height of the rectangular prism. Then find the volume.



Answers

Ex. 3 4 4 48

1. _____

2. _____

3. _____

4. _____

5. _____

6. _____

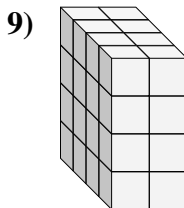
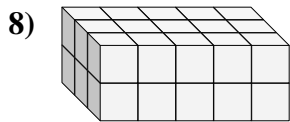
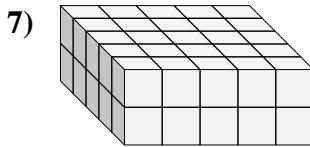
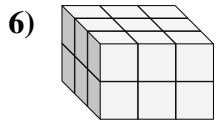
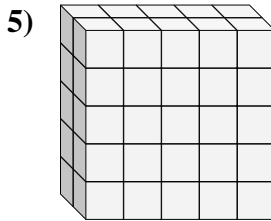
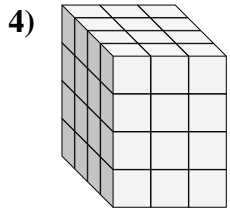
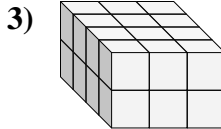
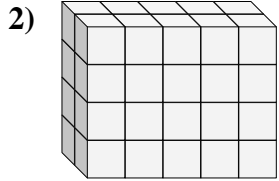
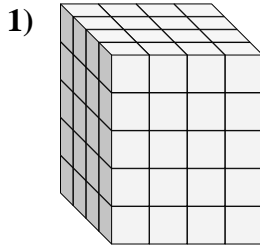
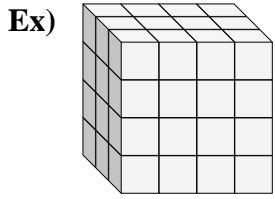
7. _____

8. _____

9. _____



Find the length, width and height of the rectangular prism. Then find the volume.



Answers

Ex. 3 4 4 48

1. 4 4 5 80

2. 2 5 4 40

3. 4 3 2 24

4. 4 3 4 48

5. 2 5 5 50

6. 3 3 2 18

7. 5 5 2 50

8. 3 5 2 30

9. 4 2 4 32